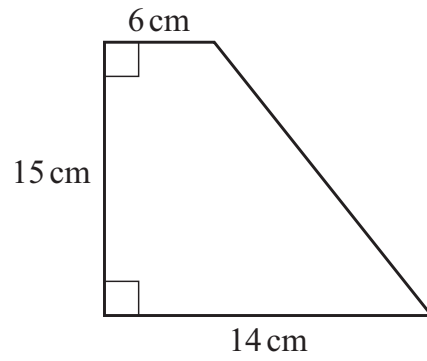


23

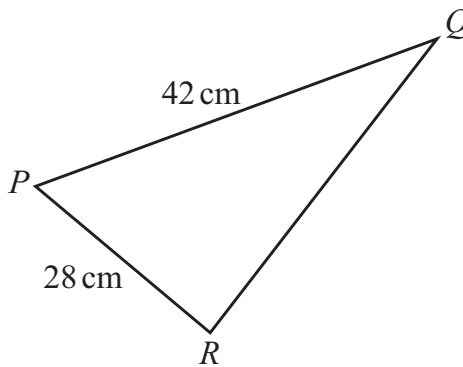
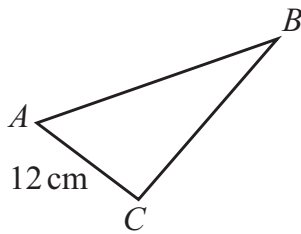


NOT TO SCALE

Calculate the perimeter of this trapezium.

..... cm [4]

24 Triangles  $ABC$  and  $PQR$  are mathematically similar.



NOT TO SCALE

Calculate  $AB$ .

$AB =$  ..... cm [2]