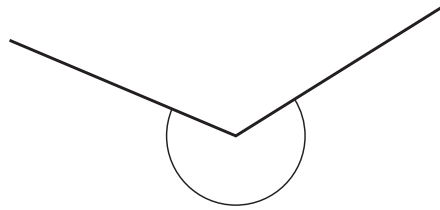


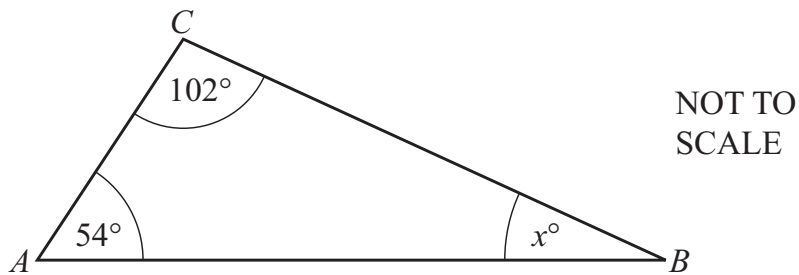
9 (a)



Write down the mathematical name for this type of angle.

..... [1]

(b) ABC is a triangle.

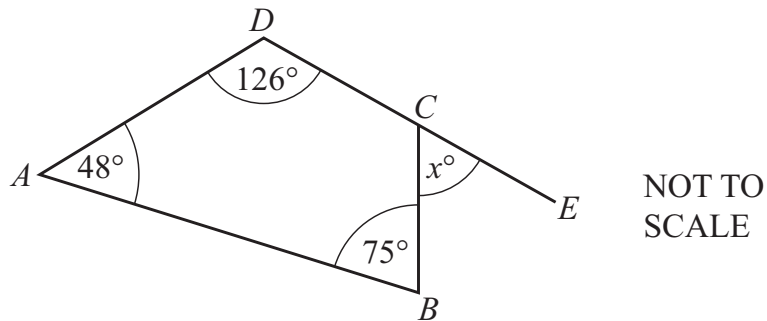


Lily says x is 34.

Give a geometrical reason why Lily is not correct.

.....
..... [1]

(c)



$ABCD$ is a quadrilateral.

DCE is a straight line.

Calculate the value of x .

$x =$ [2]