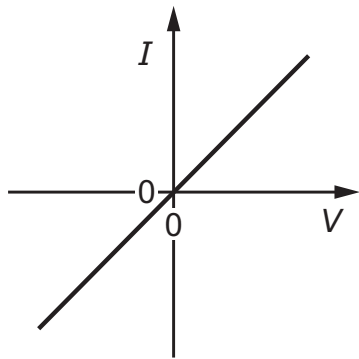
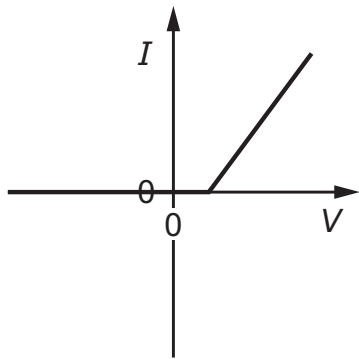


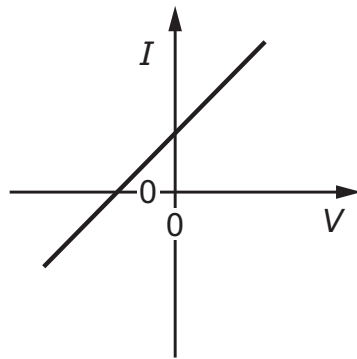
33 The I - V characteristics for three electrical components are shown.



1



2



3

Which components obey Ohm's law?

- A** 1, 2 and 3 **B** 1 and 2 only **C** 1 and 3 only **D** 1 only