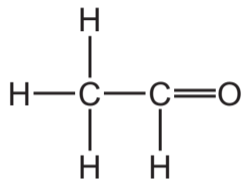
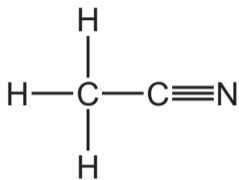


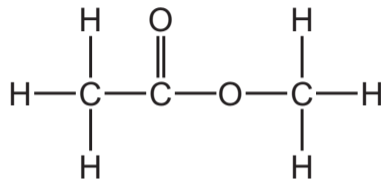
37 The structures of three organic compounds are shown.



1



2



3

Which compounds produce ethanoic acid when heated with $\text{HCl}(\text{aq})$?

- A** 1, 2 and 3 **B** 1 and 2 only **C** 1 and 3 only **D** 2 and 3 only