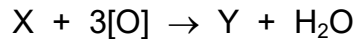


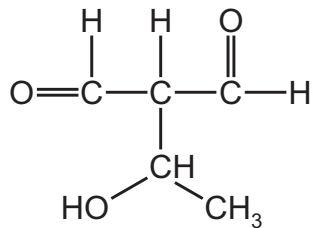
33 The balanced equation for the reaction of X with an excess of acidified $\text{K}_2\text{Cr}_2\text{O}_7$ is shown.



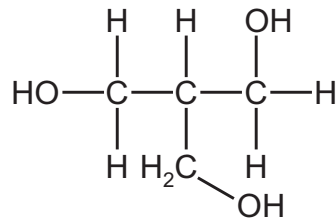
Compound Y is the only organic product of the reaction.

Which compound is X?

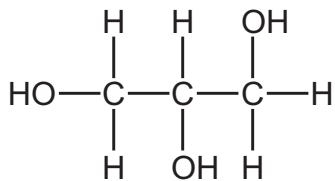
A



B



C



D

