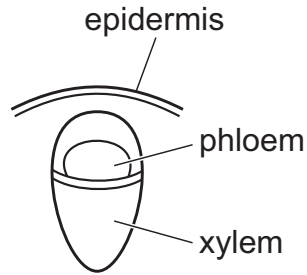
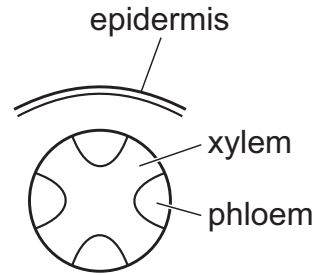


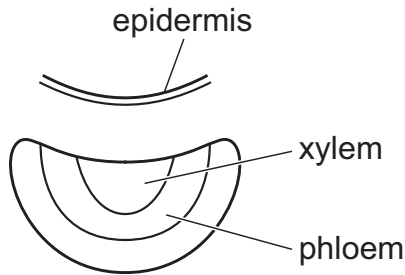
26 The diagrams show the arrangements of phloem and xylem tissues in some plant organs.



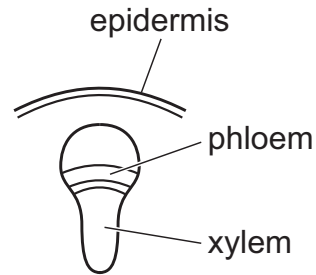
Q



R



S



T

Where will arrangements Q, R, S and T be found in plants?

	Q	R	S	T
A	leaf	root	stem	root
B	root	stem	root	leaf
C	stem	stem	leaf	root
D	stem	root	leaf	stem