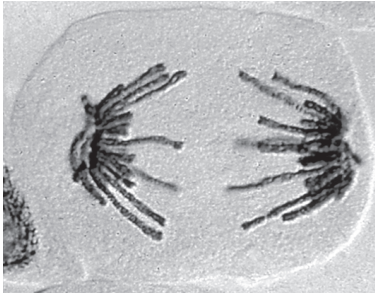
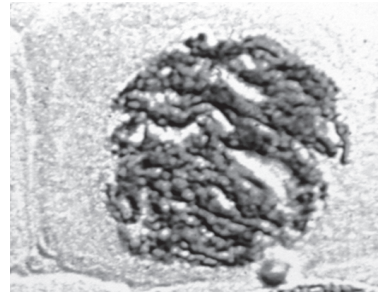


21 The photomicrographs show stages of mitosis.



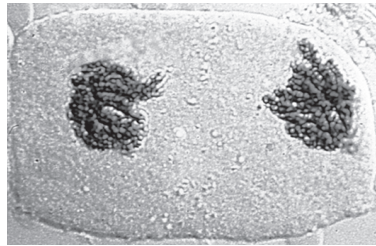
1



2



3



4



5

What is the correct order for the stages of mitosis?

A 2 → 3 → 5 → 1 → 4

B 2 → 4 → 1 → 5 → 3

C 3 → 2 → 5 → 4 → 1

D 5 → 1 → 4 → 3 → 2